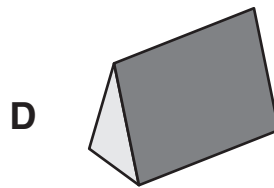
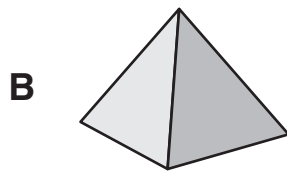
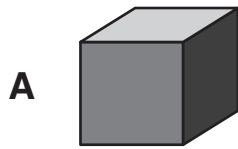


- 1** Hessa was playing a computer game.  
She scored 43 points in Round 1 and 26 points in Round 2.  
Which sum could she use to add the points together?

**A**  $40 + 20 + 3 + 6$   
**B**  $4 + 3 + 2 + 6$   
**C**  $40 + 30 + 20 + 60$   
**D**  $30 + 4 + 60 + 2$

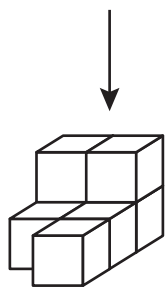
- 2** Which one of these is a triangular prism?



- 3** 4,223, 4,213, ?, 4,193, 4,183

What is the missing number?

**A** 4,200  
**B** 4,203  
**C** 4,210  
**D** 4,212



**4** What does the stack look like from above?

